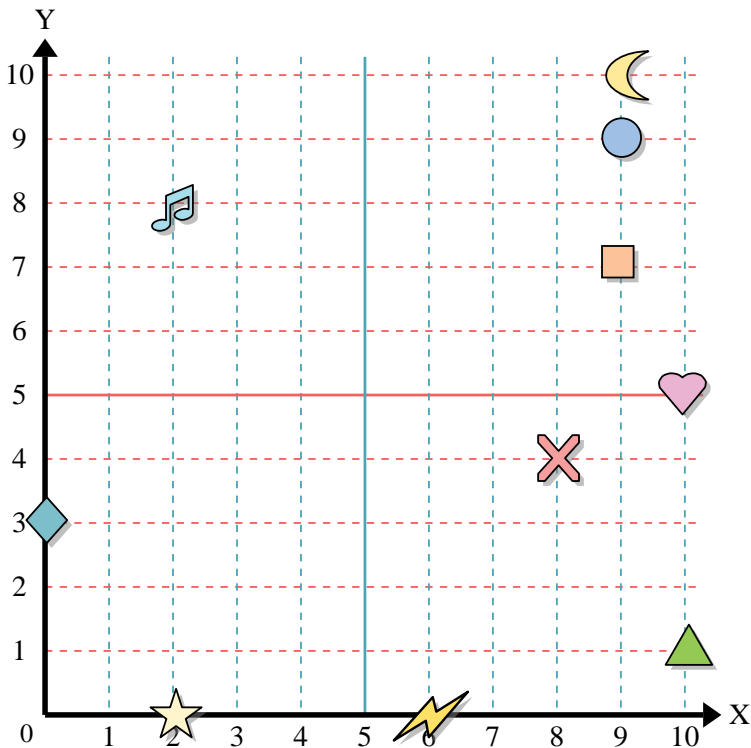




Use the grid below to determine the coordinates where each figure is located.



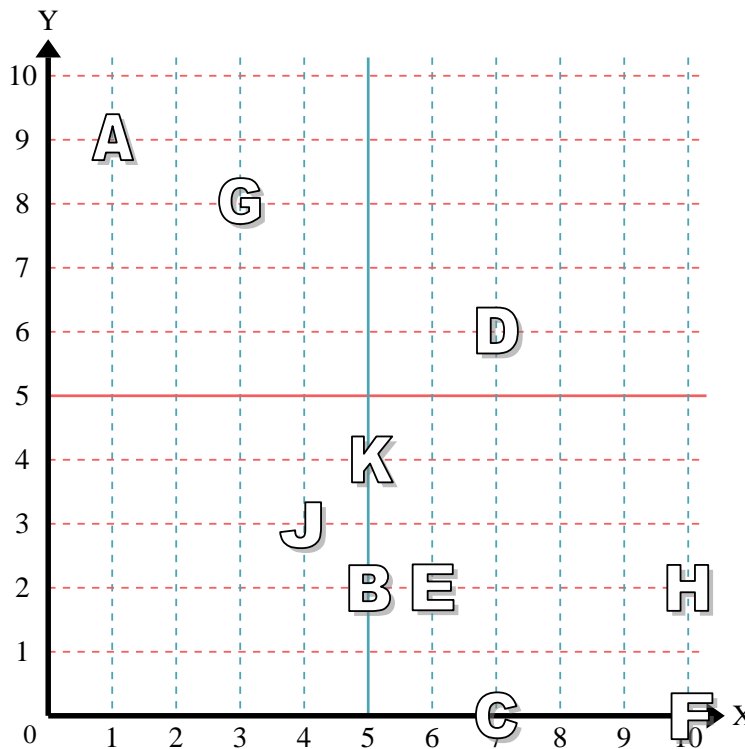
- 1) Star _____
- 2) Lightning _____
- 3) Circle _____
- 4) Heart _____
- 5) Cross _____
- 6) Triangle _____
- 7) Moon _____
- 8) Square _____
- 9) Diamond _____
- 10) Music Note _____

Answers

- 1. _____
- 2. _____
- 3. _____
- 4. _____
- 5. _____
- 6. _____
- 7. _____
- 8. _____
- 9. _____
- 10. _____
- 11. _____
- 12. _____
- 13. _____
- 14. _____
- 15. _____
- 16. _____
- 17. _____
- 18. _____
- 19. _____
- 20. _____

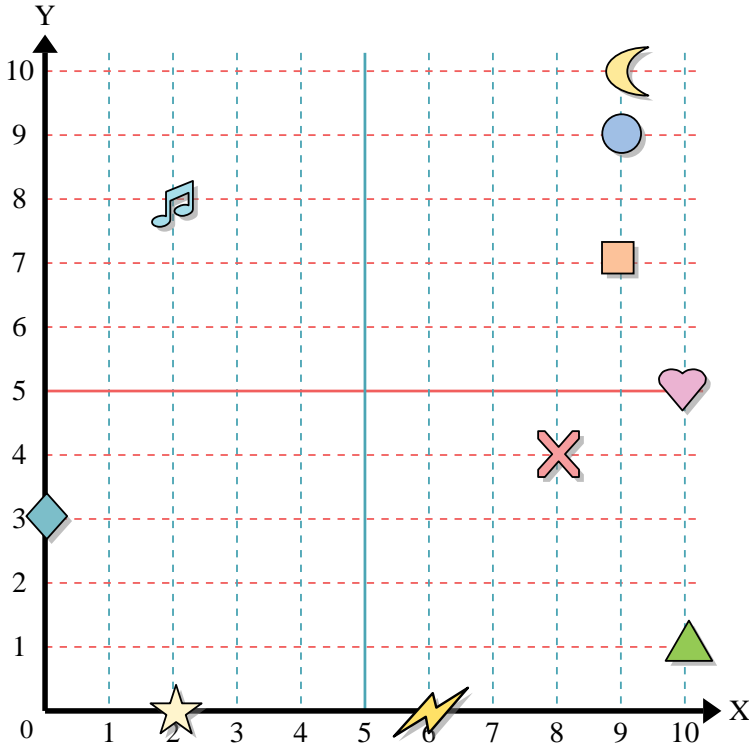
Determine which letter is at each coordinate using the grid below.

- 11) (3,8) _____
- 12) (7,0) _____
- 13) (4,3) _____
- 14) (7,6) _____
- 15) (5,4) _____
- 16) (10,2) _____
- 17) (6,2) _____
- 18) (5,2) _____
- 19) (10,0) _____
- 20) (1,9) _____





Use the grid below to determine the coordinates where each figure is located.



- 1) Star (2, 0)
- 2) Lightning (6, 0)
- 3) Circle (9, 9)
- 4) Heart (10, 5)
- 5) Cross (8, 4)
- 6) Triangle (10, 1)
- 7) Moon (9, 10)
- 8) Square (9, 7)
- 9) Diamond (0, 3)
- 10) Music Note (2, 8)

Answers

- 1. (2, 0)
- 2. (6, 0)
- 3. (9, 9)
- 4. (10, 5)
- 5. (8, 4)
- 6. (10, 1)
- 7. (9, 10)
- 8. (9, 7)
- 9. (0, 3)
- 10. (2, 8)
- 11. G
- 12. C
- 13. J
- 14. D
- 15. K
- 16. H
- 17. E
- 18. B
- 19. F
- 20. A

Determine which letter is at each coordinate using the grid below.

- 11) (3,8) G
- 12) (7,0) C
- 13) (4,3) J
- 14) (7,6) D
- 15) (5,4) K
- 16) (10,2) H
- 17) (6,2) E
- 18) (5,2) B
- 19) (10,0) F
- 20) (1,9) A

